



# All About Number 0

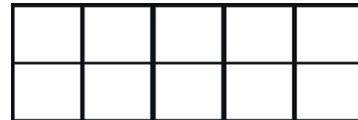
## Number Formation Activity



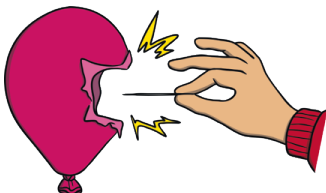
How many fingers are being shown?



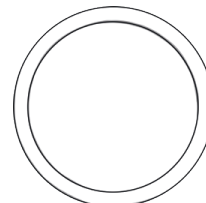

How many counters are in the ten-frame?




Oh no! Teddy had 1 balloon but it popped. How many balloons does he have left?





Teddy's friends were very hungry! How many cakes are left on the plate?

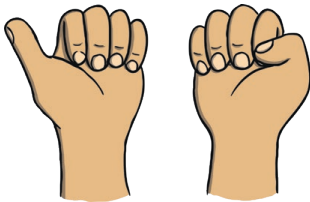


# All About Number 1

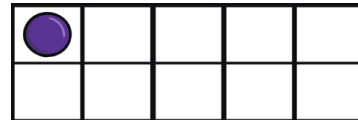
## Number Formation Activity




How many fingers are being shown?



How many counters are in the ten-frame?



How many elephants can you see?



How many cars can you see?




# All About Number 2

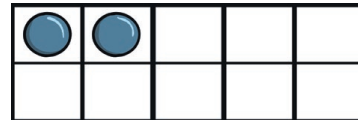
## Number Formation Activity




How many fingers are being shown?




How many counters are in the ten-frame?



How many cats can you see?




How many apples can you see?




# All About Number 3

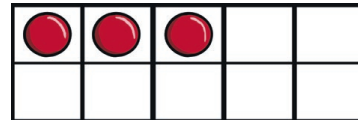
## Number Formation Activity




How many fingers are being shown?




How many counters are in the ten-frame?



How many boats can you see?




How many dogs are there?

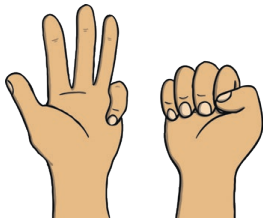


# All About Number 4

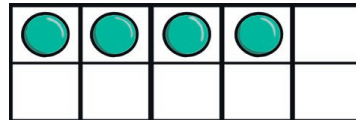
## Number Formation Activity



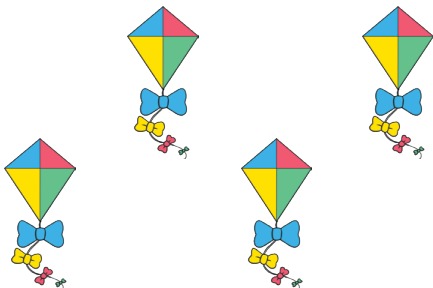
How many fingers are being shown?





How many counters are in the ten-frame?




How many kites are there?




How many mice can you see?

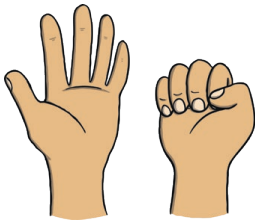


# All About Number 5

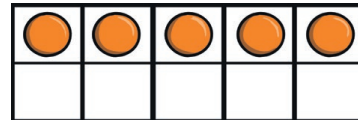
## Number Formation Activity




How many fingers are being shown?



How many counters are in the ten-frame?



How many teddy bears are there?



How many bees can you see?

